






<h1>JUNE 2020</h1>	<p>15 Find a “take-out” menu. If you had \$10.00 to spend what would you order? What is your change? Write the items and the change.</p>	<p>16 Create a Father’s Day acrostic poem.</p>	<p>17 It costs \$1.50 to buy 1 ice-cream cone. You and 5 friends are — feeling hungry. How much money will you need to buy each person and yourself an ice cream cone?</p> 	<p>18 The first U.S. postage stamps were designed in 1847. Be a stamp collector! Design your own stamp.</p> 
<p>19 Use the numbers 8, 9, and 5. Write the largest 3 digit number that you can. Tell someone which digits are in the 100’s, 10’s, and 1’s place</p>	<p>20 Word game! Invent a code (A=1, B=2, for example). Send a message in code to a friend</p>	<p>21 Lunch is at 11:45, and you are going to the playground 30 minutes later. Tell someone what time you are going to the playground.</p>	<p>22 Invent a recipe for a cool summer drink. Write it on a recipe card. Serve the drink to your friends.</p>	<p>23 Write down on your calendar the time the sun sets today.</p>
<p>24 On Mon. Jon read 5 books. On Tues. he read twice as many as he had on Mon. On Wed. he read 8 books. On Thurs. he read half of what he read on Wed. On Fri. he read 6 books. How many books did he read in all?</p>	<p>25 You and your 4 friends are toasting marshmallows around the campfire. There are 30 marshmallows in the bag. If you share them equally, how many will each of you get to toast?</p> 	<p>26 Find something small enough to put in your pocket. Write or tell a story about it.</p>	<p>27 5 ladybugs landed on the deck. Each ladybug had 4 legs. How many legs did they have in all? Write the number sentence.</p> 	


		<p>28 Take a walk. Write about or draw the things you see that show summer is here.</p>	<p>29 Start with 47. Add 30. Add 53. Subtract 27. Add 61. What number am I?</p>	<p>30 Read aloud the names of some of the cars in the classified section of your newspaper. Design a new car and name it.</p> 
--	--	--	--	--

JULY 2020

1
Use your ruler to draw a triangle whose sides are each 6 cm long. Then, another with sides that are 3 cm. Finally, one with sides that are 19 cm long.

2
Design your own board game and write the rules.

3
Use cards or dice to choose two numbers. Write fact families using the two numbers.

4
 Happy Independence Day! What is the name of our National Anthem? Who wrote it? When and why?

5
Draw a pizza with toppings you like. Divide the pizza into eighths. Label each eighth.

6
Which constellations can you see on a clear summer night? Look at the sky using a star guide to help you find the constellations.



7
Name 5 ways to make 30 cents. Draw a picture to show your thinking and write the number sentences.

8
List all the ice cream flavors you can think of. Now put them in ABC order.

9
Write as many coin combinations that equal \$1.00 using nickels, dimes, and quarters.



10
Which President served four terms in office? (Hint: He's on the dime!)

11
Look in your refrigerator. Categorize the items as dairy, fruit, vegetable, meat, grains, fats, or other. Make a tally chart.

12
Choose the correct verb. **This ____ a fun quiz that I am taking today.**
a. is
b. was
c. were
d. am
e. does

13
Create a bar graph of the drinks in your house. Categorize the drinks according to where they come from, e.g. plants, animals, man-made.









14
Go on a rock hunt! Bring your rocks home and decorate them with funny faces!

15
Write the numbers from 1 – 100 by 3s. What patterns do you see?

16
Write a how-to guide for something you do really well! (For example, "How to load the dishwasher" or "How to replace a bike tire")

17
How many different ways can you cut a sandwich into four equal pieces? Try it with real or "paper sandwiches."



<p>18 Pick an important news event from another city, state, or country. Find as much information on the topic as possible – read newspapers, listen to the radio, and watch TV news. Talk about what you learned</p> 	<p>19 Create a symmetrical picture using: triangles, squares, circles and/or trapezoids. Draw the line of symmetry. Create another.</p>	<p>20 Before you eat breakfast, predict how many pieces of your favorite cereal will fit in your bowl. Check your count as you eat! How close were you?</p> 	<p>21 Find 10 items in your house that are less than 1 foot long. Estimate how many inches long each item is. Measure the items and find the difference between your estimates and the actual lengths of the items.</p> 	
<p>22 Create a puzzle! Look through magazines and newspapers for pictures and cut them into different shapes. Mix them up and try to put it back together. What is your strategy?</p> 	<p>23 Pick a new book from your summer reading list that you want to read. If you were to read this book in exactly one week, how many pages would you have to read each day if you read the same number of pages each day?</p>	<p>24 Think of an ordinary household item, like a spoon. Think all of the possible things that item could become. For example: a stick could become a magic wand.</p> 	<p>25 If you start watching a T.V. at 8:00 AM and watch for 3 quarters of an hour. What time will it be when you're done?</p> 	<p>26 Grab a friend and play this game: try to find the letters of the alphabet – in order from A to Z – on signs, nearby buildings, or around the house. First player to Z wins!</p>
<p>27 You have 4 lollipops. 1 is grape flavored. What fraction is grape flavored?</p> 	<p>28 In a pool or bathtub, hypothesize which items will float or sink. Soap, empty water bottle, rock, etc. Test your hypothesis.</p>	<p>29 Write down the years people who live with you were born. Put them in order from least to greatest.</p>	<p>30 If you could invite your favorite book character to dinner, where would you go? What would you talk about? Journal it.</p>	<p>31 What time did you wake up today? What time did you eat lunch? How much time has passed between wake time and lunch time?</p> 

AUGUST 2020


1
Create an advertisement for a book you are reading. Include an illustration.

2
Solve
20+10
30+10
40+10
50+10
60+10
70+10
What is your strategy?

3
If you could have one wish granted, what would it be? Write about it.



4
Mark and Dan went apple picking. Mark picked 23 apples. Dan picked 77 apples. How many apples did they pick in all?



5
Imagine that you have one super power. What would it be and how would you use it for good?

6
In California, it is 3 hours earlier than it is in Philadelphia. What time will it be in California when you eat lunch? What you go to sleep?



7
Listen to some jazz music today. Write about how it makes you feel!



8
How many more popsicles do I need to buy if I already have 6 and I want to have 11? What's the number sentence?

9
Who was the third President of the United States? (Hint: He's on the nickel!)



10
How much in total money do you have using the following?
3 one dollar bills
2 quarters
3 dimes
4 pennies






11
Write a review and create a flyer for a movie you have seen recently.



12
Solve
 $15 + \underline{\quad} = 50$
What goes in the blank? Explain how you found the answer to an adult in your family.

13
It is lefthander's day! Try writing with your left hand. Already left handed? Use your right!



<p>14 You have 8 cookies. 3 are chocolate flavored. What fraction is chocolate flavored? Draw a picture to illustrate.</p> 	<p>15 Create a comic strip about something that happened to you this week.</p>	<p>16 Solve $467+390$ $769+209$ $3,234+853$ $5,099+ 2,399$ $3,799+590$</p>	<p>17 Do you know the history of Pennsylvania? What is the state bird, flower, song, or motto?</p>	<p>18 The slowest snails in the world move at a speed of about 22 inches an hour. How many inches do these snails move in half an hour?</p> 
<p>19 Here's the story: "I knew there was a problem when I saw the look on Mr. Washburn's face...." Finish the story!</p>	<p>20 People take approximately 12 breaths a minute when relaxed. How many breaths do people take in 2 minutes? 3 minutes? 4 minutes?</p>	<p>21 Hawai'i became the 50th state on this day in 1959. Find Hawai'i on a map. Would you like to live there?</p> 	<p>22 Dan went to the zoo with his Mom, his 11 year old brother and his 7 year old sister. It costs \$7.00 for adults and \$3.00 for kids. How much did it cost to get into the zoo?</p>	
<p>23 Make up a back to school cheer! Perform it for your friends and family!</p>	<p>24 Luta's mother drove 4 hours to visit a friend. She drove 40 miles each hour. How many miles did Luta's mother travel to her friend's house?</p> 	<p>25 Estimate how long it will take you to do 100 jumping jacks. Did it take more or less than 5 minutes? Record your time and compare with a friend.</p>	<p>26 Find at least 10 ways to make 100. Record each way.</p>	
<p>27 Notice what time the sun sets today. Compare it to the time the sun set on June 24!</p> 	<p>28 How many centimeters are in 2 meters? In 20 meters? In 5 meters? In 50 meters?</p>	<p>29 Mia was having a party. She put 10 stickers in each party bag. She made 12 bags with ten stickers in each one. How many stickers total were in her 12 bags?</p>	<p>30 Word game! Summer days are the longest days of the year. List the longest words you know or that you learned this summer.</p>	<p>31 Congratulations! Your brain continued to grow this summer. You are ready for third grade!</p>